

This manual includes

GOAL

Customizable, versatile
online exam question bank.
Thousands of questions!

Access your exclusive
StudyPlus⁺ bonus content:
GOAL | Flashcards | Formula sheet
* Key Code Inside *

a/s/m

Exam IFM Study Manual



1st Edition, Fourth Printing

Abraham Weishaus, Ph.D., F.S.A., C.F.A., M.A.A.A.

NO RETURN IF OPENED

a/s/m

Actuarial Study Materials
Learning Made Easier

TO OUR READERS:

Please check A.S.M.'s web site at www.studymanuals.com for errata and updates. If you have any comments or reports of errata, please e-mail us at mail@studymanuals.com.

©Copyright 2019 by Actuarial Study Materials (A.S.M.), PO Box 69,
Greenland, NH 03840. All rights reserved. Reproduction in whole or in part
without express written permission from the publisher is strictly prohibited.

Contents

1	Introduction to Derivatives	1
	Exercises	3
	Solutions	4
2	Project Analysis	5
2.1	NPV	5
2.2	Project analysis	6
2.2.1	Break-even analysis	6
2.2.2	Sensitivity analysis	7
2.2.3	Scenario analysis	7
2.3	Risk measures	7
2.3.1	Four risk measures	7
2.3.2	Coherent risk measures	10
	Exercises	11
	Solutions	14
3	Monte Carlo Simulation	19
	Exercises	22
	Solutions	38
4	Efficient Markets Hypothesis (EMH)	51
	Exercises	53
	Solutions	55
5	Mean-Variance Portfolio Theory	57
	Exercises	66
	Solutions	69
6	Capital Asset Pricing Model (CAPM)	75
6.1	Required return	75
6.2	CAPM	76
	Exercises	79
	Solutions	83
7	Cost of Capital	87
7.1	Estimating CAPM's parameters	87
7.2	Project cost of capital	88
	Exercises	90
	Solutions	95
8	Behavioral Finance and Multifactor Models	101
8.1	Behavioral finance	101
8.2	Multifactor models	102
	Exercises	104
	Solutions	105
9	Capital Structure	107
	Exercises	109
	Solutions	112

10 The Effect of Taxes on Capital Structure	117
Exercises	119
Solutions	121
11 Other Factors Affecting Optimal Debt-Equity Ratio	125
11.1 Bankruptcy and Financial Distress	125
11.2 Agency costs and benefits	127
11.3 Asymmetric information	128
Exercises	128
Solutions	132
12 Equity Financing	135
12.1 Sources of capital for private companies	135
12.2 Allocation of company value among investors	135
12.3 Going public: the IPO	137
12.4 IPO puzzles	138
Exercises	138
Solutions	140
13 Debt Financing	143
13.1 Corporate Debt	143
13.2 Other Debt	144
Exercises	145
Solutions	146
14 Forwards	147
14.1 How a forward works	147
14.2 Pricing a Forward	148
14.3 Additional Comments on Forwards	151
14.3.1 Forward Premium	151
14.3.2 Comparison of Forward Price to Expected Future Price	151
14.4 Synthetic forwards	152
Exercises	152
Solutions	156
15 Variations on the Forward Concept	161
15.1 Prepaid forwards	161
15.2 Futures	162
Exercises	163
Solutions	165
16 Options	167
16.1 Call options	167
16.2 Put options	168
Exercises	170
Solutions	174
17 Option Strategies	177
17.1 Options with Underlying Assets	177
17.2 Synthetic Forwards	179
17.3 Bear Spreads, Bull Spreads, and Collars	180
17.3.1 Spreads: buying an option and selling another option of the same kind	180
17.3.2 Collars: buying one option and selling an option of the other kind	183
17.4 Straddles, strangles, and butterfly spreads	185

Exercises	187
Solutions	197
18 Put-Call Parity	201
18.1 Stock put-call parity	202
18.2 Synthetic stocks and Treasuries	203
18.3 Synthetic options	204
18.4 Currency options	204
Exercises	206
Solutions	213
19 Comparing Options	221
19.1 Bounds for Option Prices	221
19.2 Early exercise of American options	223
19.3 Time to expiry	226
19.4 Different strike prices	229
19.4.1 Three inequalities	229
19.4.2 Options in the money	236
Exercises	237
Solutions	240
20 Binomial Trees—Stock, One Period	245
20.1 Risk-neutral pricing	245
20.2 Replicating portfolio	247
20.3 Volatility	251
Exercises	253
Solutions	261
21 Binomial Trees—General	271
21.1 Multi-period binomial trees	271
21.2 American options	272
21.3 Currency options	274
21.4 Options on Futures	274
21.5 Other assets	278
Exercises	279
Solutions	287
22 Binomial Trees: Understanding Early Exercise of Options	303
Exercises	304
Solutions	305
23 Modeling Stock Prices with the Lognormal Distribution	307
23.1 The normal and lognormal distributions	307
23.1.1 The normal distribution	307
23.1.2 The lognormal distribution	308
23.1.3 Jensen's inequality	308
23.2 The lognormal distribution as a model for stock prices	310
23.2.1 Stocks without dividends	310
23.2.2 Stocks with dividends	312
23.2.3 Prediction intervals	313
23.3 Conditional payoffs using the lognormal model	314
Exercises	318
Solutions	322

24 The Black-Scholes Formula	327
24.1 Black-Scholes Formula for common stock options	328
24.2 Black-Scholes formula for currency options	330
24.3 Black-Scholes formula for options on futures	331
Exercises	333
Solutions	338
25 The Black-Scholes Formula: Greeks	347
25.1 Greeks	347
25.1.1 Delta	348
25.1.2 Gamma	353
25.1.3 Vega	353
25.1.4 Theta	355
25.1.5 Rho	359
25.1.6 Psi	362
25.1.7 Greek measures for portfolios	365
25.2 Elasticity and related concepts	367
25.2.1 Elasticity	367
25.2.2 Related concepts	368
25.2.3 Elasticity of a portfolio	369
25.3 What will I be tested on?	370
Exercises	371
Solutions	377
26 Delta Hedging	385
26.1 Overnight profit on a delta-hedged portfolio	385
26.2 The delta-gamma-theta approximation	389
26.3 Hedging multiple Greeks	391
26.4 What will I be tested on?	392
Exercises	394
Solutions	401
27 Asian, Barrier, and Compound Options	411
27.1 Asian options	411
27.2 Barrier options	415
27.3 Maxima and minima	418
27.4 Compound options	419
27.4.1 Compound option parity	420
Exercises	422
Solutions	427
28 Gap, Exchange, and Other Options	435
28.1 Gap options	435
28.1.1 Definition of gap options	435
28.1.2 Pricing gap options using Black-Scholes	436
28.1.3 Delta hedging gap options	439
28.2 Exchange options	440
28.3 Other exotic options	441
28.3.1 Chooser options	441
28.3.2 Forward start options	443
Exercises	445
Solutions	453

29 Supplementary Questions—Derivatives	461
Solutions	469
30 Real Options	477
30.1 Decision trees	477
30.2 Black-Scholes	479
30.3 Option to abandon project	480
Exercises	481
Solutions	483
31 Actuarial Applications of Options	487
31.1 Variable annuities	487
31.2 Mortgage guaranty insurance	489
31.3 Other insurance features that constitute options	489
31.4 Static hedging strategies using exotic options	490
31.5 Dynamic hedging	491
31.6 Hedging catastrophe risk	491
Exercises	491
Solutions	493
 Practice Exams	 495
1 Practice Exam 1	497
2 Practice Exam 2	505
3 Practice Exam 3	515
4 Practice Exam 4	523
5 Practice Exam 5	531
6 Practice Exam 6	539
7 Practice Exam 7	547
8 Practice Exam 8	555
9 Practice Exam 9	563
10 Practice Exam 10	571
11 Practice Exam 11	581
 Appendices	 591
A Solutions for the Practice Exams	593
Solutions for Practice Exam 1	593
Solutions for Practice Exam 2	599
Solutions for Practice Exam 3	605
Solutions for Practice Exam 4	612
Solutions for Practice Exam 5	619
Solutions for Practice Exam 6	626

Solutions for Practice Exam 7	634
Solutions for Practice Exam 8	642
Solutions for Practice Exam 9	650
Solutions for Practice Exam 10	658
Solutions for Practice Exam 11	668
B Solutions to Old Exams	677
B.1 Solutions to SOA Exam MFE, Spring 2007	677
B.2 Solutions to CAS Exam 3, Spring 2007	681
B.3 Solutions to CAS Exam 3, Fall 2007	684
B.4 Solutions to Exam MFE/3F, Spring 2009	688
B.5 Solutions to Advanced Derivatives Sample Questions	691
C Lessons Corresponding to Questions on Released and Practice Exams	701
D Standard Normal Distribution Function Table	705

Lesson 2

Project Analysis

Reading: *Corporate Finance* 8.5, IFM 21-18 2-3

This lesson begins the corporate finance part of the course. From here up to and including Lesson 13, when not told otherwise, assume that interest rates are annual effective.

2.1 NPV

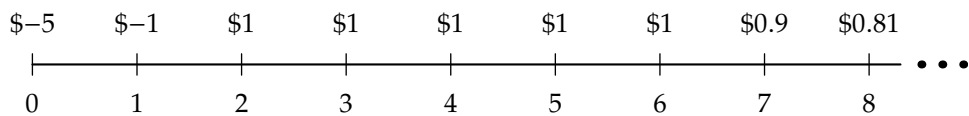
When a company considers embarking on a project, it must verify that this project will meet the company's financial goals. The measure we will use for this is *NPV*, or net present value. To compute the NPV we calculate the *free cash flows* of the project. The free cash flows are the cash amounts generated by the project itself, both positive and negative, year by year. Cash flows do not include non-cash accounting items, such as depreciation.¹ The free cash flows also do not include cash flows from financing used to support the project. If a loan is taken to pay the project's initial expenses, neither the loan nor interest on the loan is part of free cash flows. Free cash flows are purely cash generated by the project itself.

The NPV is the present value, at the start of the project, of the project's free cash flows. At what interest rate is the NPV calculated? Usually the NPV is calculated at the interest rate the company must pay to finance the project. In other words, the NPV is calculated at the interest rate that has to be paid to investors in order to get them to invest in the project. This interest rate is called the *cost of capital*. We will discuss what the cost of capital should be in the following lessons.

EXAMPLE 2A A life insurance company is considering developing a new Universal Life product. It will cost \$5 million, payable immediately, to develop this product, and developing the product will take a year. The company estimates free cash flows will be \$-1 million at the end of the first year, followed by \$1 million per year for 5 years, and will then decrease at a compounded rate of 10% per year after that.

The company's cost of capital is 12%.
Calculate the NPV of the project.

SOLUTION: The following time line shows the cash flows in millions:



The NPV generated during the first 6 years is

$$-5,000,000 - \frac{1,000,000}{1.12} + 1,000,000 \left(\frac{a_{\overline{5}|0.12}}{1.12} \right) = -5,892,857 + 1,000,000 \left(\frac{1 - 1/1.12^5}{0.12(1.12)} \right) = -2,674,307$$

After 6 years, free cash flows form a geometric series with first term $900,000/1.12^7$ and ratio $0.9/1.12$. The NPV generated after year 6, in millions, is

$$900,000 \left(\frac{1/1.12^7}{1 - 0.9/1.12} \right) = 2,072,582$$

Total NPV is $-2,674,307 + 2,072,582 = \boxed{-601,725}$. □

¹However, for insurance products, they include changes in reserves. A company must set aside cash to support the reserves, although this cash may be invested.

Companies should invest in a project only if $NPV > 0$. Otherwise they destroy the value of the company.

If we assume that free cash flows are constant, they form a perpetuity. As you learned in Financial Mathematics, the present value of an immediate perpetuity of 1 per year is $1/i$, where i is the interest rate. If the free cash flows are 1 in the first year and grow at compounded rate g , then their present value is

$$\begin{aligned} NPV &= \sum_{n=1}^{\infty} \frac{(1+g)^{n-1}}{(1+i)^n} \\ &= \frac{1/(1+i)}{1 - (1+g)/(1+i)} \\ &= \frac{1/(1+i)}{(i-g)/(1+i)} = \frac{1}{i-g} \end{aligned} \quad (2.1)$$



Quiz 2-1 A company is considering a project. This project will require an investment of 10 million immediately and will generate free cash flows of 1 million per year at the end of one year, increasing at a compounded rate of 3% per year perpetually.

The cost of capital is 9%.

Calculate the NPV of the project.

2.2 Project analysis

2.2.1 Break-even analysis

Companies analyze the risk in a project. One way to analyze the risk is to vary the assumptions used to calculate the NPV with the changed assumptions. *Break-even analysis* consists of determining the value of each assumption parameter for which the NPV is 0, assuming that the other assumption parameters are at their baseline values.

Calculation of IRR is an example of break-even analysis. IRR, the internal rate of return, is an alternative profit measure to NPV. The IRR is the interest rate r such that the present value of free cash flows at r is 0. Assuming the usual pattern of negative free cash flows initially followed by positive free cash flows, IRR is the highest interest rate for which the NPV is at least 0. Thus IRR is the highest interest rate for which the company breaks even.

A similar analysis can be done for the other parameters. A break-even analysis calculates the break-even level of number of sales, expenses, sales price, level of cash flows per year, and any other parameter.

EXAMPLE 2B A project requires an immediate investment of 19 million. It is expected to generate free cash flows of 2 million per year at the end of the first year, growing 2% per year perpetually. The cost of capital is 12%.

Perform a break-even analysis on the rate of growth of free cash flows.

SOLUTION: Let g be the growth rate. We want to solve $-19 + \frac{2}{0.12-g} = 0$

$$-19 + \frac{2}{0.12-g} = 0$$

$$\frac{2}{0.12-g} = 19$$

$$0.12 - g = \frac{2}{19}$$

$$g = \boxed{0.01474} \quad \square$$



Quiz 2-2 A project to develop a new product requires an immediate investment of 9 million. It will then generate free cash flows of 1 million per year starting with the end of the first year, until the product becomes obsolete and cannot be sold. The cost of capital is 10%.

Perform a break-even analysis on the number of years the product must sell.

2.2.2 Sensitivity analysis

Sensitivity analysis consists of calculating the change in the NPV resulting from a change in a parameter. Typically one sets the parameter to its value in the worst possible case and the best possible case, and calculates the NPV for both cases. This analysis shows which parameters have the greatest impact on the NPV.

EXAMPLE 2C A project to develop a new product requires an immediate investment of 15 million. Free cash flows generated by this project are 20% of sales. Sales are expected to be level, and to continue for a certain number of years, at which point the product becomes obsolete. The best and worst cases for each assumption are:

	Worst case	Baseline	Best case
Annual sales (\$ million)	20	25	30
Number of years	3	5	7
Cost of capital	0.16	0.12	0.08

Perform a sensitivity analysis on the three factors listed in the table. Which factor is the NPV most sensitive to?

SOLUTION: We'll do all calculations in millions.

For annual sales s :

$$\text{NPV} = -15 + 0.2sa_{\overline{5}|0.12} = -15 + 0.2s \left(\frac{1 - 1/1.12^5}{0.12} \right)$$

which is $-\$0.581$ million for $s = 20$ and $\$6.629$ million for $s = 30$, a variation of $\$7.210$ million

For number of years n :

$$\text{NPV} = -15 + 5a_{\overline{n}|0.12} = -15 + 5 \left(\frac{1 - 1/1.12^n}{0.12} \right)$$

which is $-\$2.991$ million for $n = 3$ and $\$7.818$ million for $n = 7$, a variation of $\$10.809$ million.

For cost of capital r :

$$\text{NPV} = -15 + 5a_{\overline{5}|r} = -15 + 5 \left(\frac{1 - 1/(1+r)^5}{r} \right)$$

which is $\$1.371$ million for $r = 0.16$ and $\$4.964$ for $r = 0.08$, a variation of $\$3.593$ million.

We see that number of years of sales is the assumption to which NPV is most sensitive. □

2.2.3 Scenario analysis

Often parameters are correlated and should not be analyzed separately. For example, increasing the price of a product may lower sales. Scenario analysis consists of calculating the NPV for various scenarios. A scenario may vary two parameters in a consistent manner, leaving the other parameters unchanged if they are uncorrelated.

2.3 Risk measures

In the previous section we analyzed risk by varying parameters. An alternative method for analyzing risk is to assign a number to the project indicating its riskiness. This section discusses such risk measures. Each of these risk measures is a function from a random variable to a real number. The random variable may be profits, returns on investment, or aggregate loss amounts paid by an insurance company. Notice that the direction of risk for aggregate loss amounts is the opposite of profits or returns: the risk is that profits or returns are low and that loss amounts are high.

2.3.1 Four risk measures

We will discuss four risk measures: variance, semi-variance, VaR, and TVaR.

Variance

Variance is a popular risk measure and will be used in mean-variance portfolio theory, which we discuss starting in Lesson 5. If R is the random variable for the return on an investment, the mean return is μ and the variance is

$$\text{Var}(R) = \sigma^2 = \mathbf{E}[(R - \mu)^2] = \mathbf{E}[R^2] - \mu^2 \quad (2.2)$$

An equivalent risk measure is the square root of the variance, or the standard deviation σ . We'll also use the notation $\text{SD}(R)$ for the standard deviation.

$$\text{SD}(R) = \sqrt{\text{Var}(R)} = \sigma$$

The standard deviation of the rate of return is also called the *volatility* of the rate of return.

The variance may be estimated from a sample using the formula

$$\hat{\sigma}^2 = \sum_{i=1}^n \frac{(R_i - \bar{R})^2}{n}$$

where \bar{R} is the sample mean. That is the formula given in the study note, but usually the denominator is $n - 1$ instead of n to make this estimate unbiased. In fact, the formula for estimating volatility given in the Berk/DeMarzo textbook is equation (5.1) on page 57, and that formula divides by $n - 1$.

Semi-variance

Since we are more concerned with underperformance than overperformance, at least for profits and rates of return on investments, we may prefer the downside semi-variance, which we'll refer to as the *semi-variance* for short, as a measure of risk. The semi-variance considers the square difference from the mean only when that difference is negative. It is defined by

$$\sigma_{SV}^2 = \mathbf{E}[\min(0, (R - \mu))^2] \quad (2.3)$$

The semi-variance is positive even though it is based on negative differences from the mean, since the differences are squared. The square root of the downside semi-variance is the downside standard deviation.

EXAMPLE 2D The random variable X has an exponential distribution with mean 1:

$$f_X(x) = e^{-x}, \quad x > 0$$

Calculate the semi-variance of X .

SOLUTION: We integrate $\min(0, x - 1)^2$ over the density function. This minimum is 0 for $x > 1$, so we only integrate up to 1. We'll integrate by parts twice.

$$\begin{aligned} \int_0^1 (x - 1)^2 e^{-x} dx &= -(x - 1)^2 e^{-x} \Big|_0^1 + 2 \int_0^1 (x - 1) e^{-x} dx \\ &= 1 + 2 \left(-(x - 1) e^{-x} \Big|_0^1 + \int_0^1 e^{-x} dx \right) \\ &= 1 - 2 + 2(1 - e^{-1}) = 1 - 2e^{-1} = \boxed{0.264241} \end{aligned}$$

□

The sum of the downside semi-variance and the upside semi-variance is the variance:

$$\begin{aligned} \mathbf{E}[(X - \mu)^2] &= \int_{-\infty}^{\infty} (x - \mu)^2 f_X(x) dx \\ &= \int_{-\infty}^{\mu} (x - \mu)^2 f_X(x) dx + \int_{\mu}^{\infty} (x - \mu)^2 f_X(x) dx \end{aligned}$$

The first term of the last expression is the downside semi-variance and the second term is the upside semi-variance.

The semi-variance may be estimated from a sample by

$$\hat{\sigma}_{SV}^2 = \frac{1}{n} \sum_{i=1}^n \min(0, (R_i - \bar{R}))^2 \quad (2.4)$$



Quiz 2-3 You are given the following sample:

5 10 15 20 25

Calculate the sample semi-variance.

Value-at-Risk (VaR)

The VaR of a random variable X at level α is the 100α percentile of the random variable. For a continuous random variable, it is x such that $\Pr(X \leq x) = \alpha$. For profits or rates of return, where the risk is that X is low, α is picked low, with values like 0.05, 0.025, 0.01, 0.005. For aggregate insurance losses, where the risk is that X is high, α is picked high, with values like 0.95, 0.975, 0.99, 0.995.

The VaR is calculated by inverting the cumulative distribution function:

$$\text{VaR}_\alpha(X) = F_X^{-1}(\alpha) \quad (2.5)$$

EXAMPLE 2E Profits have a distribution with the following density function:

$$f(x) = \frac{3}{(1+x)^4} \quad x > 0$$

Calculate VaR of profits at the 0.01 level.

SOLUTION: Integrate $f(x)$ to obtain the cumulative distribution function, then invert that function at 0.01.

$$\begin{aligned} F(x) &= \int_0^x \frac{3 dt}{(1+t)^4} = 1 - \frac{1}{(1+x)^3} \\ 1 - \frac{1}{(1+x)^3} &= 0.01 \\ 1+x &= \sqrt[3]{1/0.99} = 1.003356 \\ x &= \boxed{0.003356} \quad \square \end{aligned}$$

To estimate VaR from a sample, the sample is ordered from lowest to highest, and then the 100α percentile is selected. This percentile is not well-defined since a sample is a discrete distribution, so some rule for selecting the percentile is needed. For example, if the sample is size 1000 and $\alpha = 0.05$, then one might set the sample VaR equal to the 50th order statistic (most conservative), the 51st order statistic, or some weighted average of the two, such as the smoothed empirical percentile defined in the Exam STAM syllabus.

Tail value-at-risk

While value-at-risk identifies the amount which returns or profits will exceed a great proportion ($1 - \alpha$ to be exact) of the time, it doesn't consider the severity of the downside risk in the remaining α of the time. Tail value-at-risk, also known as Conditional Tail Expectation (CTE) or Expected Shortfall measures this risk. It is defined as the expected value of the random variable given that it is below the 100α percentile for downside risk

$$\text{TVaR}_\alpha(X) = \mathbf{E}[X \mid X < \text{VaR}_\alpha(X)] = \frac{\int_{-\infty}^{\text{VaR}_\alpha(X)} x f(x) dx}{\alpha} \quad (2.6)$$

or the expected value of the random variable given that it is above the 100α percentile for upside risk, like aggregate losses

$$\text{TVaR}_\alpha(X) = \mathbf{E}[X \mid X > \text{VaR}_\alpha(X)] = \frac{\int_{\text{VaR}_\alpha(X)}^{\infty} x f(x) dx}{1 - \alpha} \quad (2.7)$$

You should be able to figure out whether upside or downside risk is present based on what is being analyzed, but if not, if $\alpha < 0.5$, presumably the risk is downside and if $\alpha > 0.5$, presumably the risk is upside.

It may be difficult or impossible to evaluate the intergral needed to calculate TVaR.

TVaR can be estimated from a sample. Select the bottom or top α proportion of the items of the sample and calculate their mean. For example, if the sample is size 1000 and $\alpha = 0.05$, average the lowest 50 items of the sample to calculate downside risk.

2.3.2 Coherent risk measures

Let's list four desirable properties of a risk measure $g(X)$.

1. **Translation invariance.** Adding a constant to the random variable should add the same constant to the risk measure. Or:

$$g(X + c) = g(X) + c$$

This is reasonable, since a constant gain or loss generates no risk beyond its amount.

2. **Positive homogeneity.** Multiplying the random variable by a positive constant should multiply the risk measure by the same constant:

$$g(cX) = cg(X)$$

This is reasonable, since expressing the random variable in a different currency (for example) should not affect the risk measure.

3. **Subadditivity.** For any two random losses X and Y , the risk measure for $X + Y$ should not be greater than the sum of the risk measures for X and Y separately:

$$g(X + Y) \leq g(X) + g(Y)$$

This is reasonable, since combining losses may result in diversification and reducing the total risk measure, but it should not be possible by breaking a risk into two sub-risks to reduce the total risk measure.

This is for measuring upside risk. For measuring downside risk, the subadditivity property becomes $g(X+Y) \geq g(X) + g(Y)$.²

4. **Monotonicity.** For any two random losses X and Y , if X is always less than Y , or even if the probability that X is less than or equal to Y is 1, then the risk measure for X should be no greater than the risk measure for Y .

$$g(X) \leq g(Y) \text{ if } \Pr(X \leq Y) = 1$$

This is reasonable, since X clearly has no more risk than Y .

This is for measuring upside risk. For measuring downside risk, the monotonicity property becomes $g(X) \geq g(Y)$ if $\Pr(X \geq Y) = 1$.²

Risk measures satisfying all four of these properties are called *coherent*.

Risk measures with variance in their formula (such as variance itself and semi-variance) fail the monotonicity property, since a constant has less variance than a random variable that varies, even if the random variable is always less than the constant.

Value-at-risk is not subadditive and therefore not coherent, but tail value-at-risk is coherent. Value-at-risk satisfies the other properties. In special cases, such as when all distributions under consideration are normal, value-at-risk is coherent.

²The study note does not mention that the inequalities for coherence for downside risks are reversed.

Table 2.1: Formula Summary

NPV	$\text{NPV} = \sum_{n=0}^{\infty} \frac{\text{FCF}_n}{(1+r)^n}$
where	
FCF _n is free cash flow at time <i>n</i>	
<i>r</i> is the cost of capital	
If free cash flows are <i>k</i> at time 1 and grow at constant rate <i>g</i> , and the cost of capital is <i>r</i> , then their NPV is	
	$\frac{k}{r-g} \quad (2.1)$
Downside semi-variance:	$\sigma_{SV}^2 = \mathbf{E}[\min(0, (R - \mu))^2] \quad (2.3)$
Sample downside semi-variance:	$\hat{\sigma}_{SV}^2 = \frac{1}{n} \sum_{i=1}^n \min(0, (R_i - \bar{R}))^2 \quad (2.4)$
Value-at-risk:	$\text{VaR}_\alpha(X) = F_X^{-1}(\alpha) \quad (2.5)$
TVaR for downside risk:	$\text{TVaR}_\alpha(X) = \mathbf{E}[X \mid X < \text{VaR}_\alpha(X)] = \frac{\int_{-\infty}^{\text{VaR}_\alpha(X)} x f(x) dx}{\alpha} \quad (2.6)$
TVaR for upside risk:	$\text{TVaR}_\alpha(X) = \mathbf{E}[X \mid X > \text{VaR}_\alpha(X)] = \frac{\int_{\text{VaR}_\alpha(X)}^{\infty} x f(x) dx}{1 - \alpha} \quad (2.7)$

Exercises

2.1. A project requires an immediate investment of 12 million and an additional investment of 1 million per year for 5 years starting at the end of year 1. The project will generate free cash flows (ignoring the investment cash flows) of 1.5 million in year 1, growing 2% per year perpetually. The cost of capital is 10%.

Calculate the NPV of this project.

2.2. A project to produce new widgets requires a \$10 million investment paid immediately. Installing the machinery will take one year, during which time no widgets will be sold. It is expected that the sale of widgets will generate \$2 million of free cash flows in year 2, growing \$200,000 per year until year 11, at which time they will become obsolete and will not be sold any more.

The cost of capital is 10%.

Calculate the NPV of this project.

2.3. A project to produce desks requires an investment of \$20 million immediately. The machinery will last for 7 years, at which point the project ends. You are given:

- (i) The desks will sell for \$500 apiece.
- (ii) The same number of desks will be sold each year.
- (iii) There will be fixed costs of \$1 million per year, and the variable costs associated with manufacturing and selling the desks are \$200 apiece.
- (iv) The revenues from selling the desks and the associated fixed and variable costs occur at the end of each year.
- (v) The cost of capital is 12%.

Based on a break-even analysis, calculate the number of desks per year that must be sold.

2.4. A project requires an immediate investment of 8 million. An additional investment of 2 million is required at the end of year 1. Starting in the second year, the project will generate free cash flows of 1 million per year, growing 3% per year perpetually.

Based on a break-even analysis, determine the cost of capital to break even.

2.5. A project requires an investment of 8 million. The following are baseline, best case, and worst case assumptions:

	Worst case	Baseline	Best case
Free cash flows in first year	1.1	1.2	1.3
Rate of growth of free cash flows	0	0.03	0.05
Number of years of free cash flows	7	10	13

The cost of capital is 0.10.

Which of the three assumptions in the table is the NPV most sensitive to?

2.6. A company invests 8 million in a project to produce a new product. The product can be perpetually. A sensitivity analysis considers the following assumptions:

	Worst case	Baseline	Best case
Annual number of units sold	1,000,000	1,200,000	1,500,000
Price per unit	1.25	1.50	1.60
Expenses, as percentage of sales price	23%	20%	15%

The cost of capital is 0.15.

To which assumption is the NPV most sensitive?

2.7. You are given the following sample:

1 3 7 15 25 39

Calculate the downside semi-variance.

2.8. A random variable X follows a normal distribution with $\mu = 20$, $\sigma^2 = 100$.

Calculate the downside standard deviation of X .

2.9. A random variable X has the following probability density function:

$$f(x) = \begin{cases} 2x & 0 \leq x \leq 1 \\ 0 & \text{otherwise} \end{cases}$$

Calculate the downside semi-variance of X .

2.10. Profits X have the following cumulative distribution function:

$$F(x) = e^{-1000/x} \quad x > 0$$

Calculate the value-at-risk at 1%.

2.11. Profits X have the following cumulative distribution function:

$$F(x) = \begin{cases} 1 - \left(\frac{1000}{x}\right)^2 & x > 1000 \\ 0 & \text{otherwise} \end{cases}$$

Calculate the value-at-risk at 0.5%.

2.12. Losses on an insurance are distributed as follows:

Greater than	Less than or equal to	Probability
0	1000	0.45
1000	2000	0.25
2000	5000	0.22
5000	10000	0.05
10000	20000	0.03

Within each range losses are uniformly distributed.

Calculate the tail value-at-risk for losses at 95%.

2.13. Profits X have the following cumulative distribution function:

$$F(x) = 1 - e^{-x/1000} \quad x > 0$$

Calculate the tail value-at-risk at 5%.

2.14. For a simulation with 100 runs, the largest 20 values are

920 920 922 925 926 932 939 940 943 945
948 952 959 962 969 976 989 1005 1032 1050

Estimate TVaR at 95% from this sample.

2.15. Consider the risk measure $g(X) = \mathbf{E}[X^2]$. Assume it is used only for nonnegative random variables.

Which coherence properties does it satisfy?

2.16. Consider the risk measure $g(X) = \mathbf{E}[\sqrt{X}]$. Assume it is used only for nonnegative random variables.

Which coherence properties does it satisfy?

Finance and Investment sample questions: 27,34,35,42

Solutions

2.1. The present value of the investment is $12 + (1 - 1/1.1^5)/0.1 = 15.791$ million. The present value of the free cash flows is $1.5/(0.1 - 0.02) = 18.75$ million. The NPV is $18.75 - 15.791 = \boxed{2.959}$ million.

2.2. At time 1, the present value of the cash flows from the widgets is $1,800,000a_{\overline{10}|} + 200,000(Ia)_{\overline{10}|}$.

$$\begin{aligned} a_{\overline{10}|} &= \frac{1 - 1/1.1^{10}}{0.1} = 6.144567 \\ \ddot{a}_{\overline{10}|} &= (6.144567)(1.1) = 6.759024 \\ (Ia)_{\overline{10}|} &= \frac{6.759024 - 10/1.1^{10}}{0.1} = 29.03591 \end{aligned}$$

So the present value of the cash flows at time 1 is $6.144567(1,800,000) + 29.03591(200,000) = 16,867,404$. Discounting to time 0 and subtracting the investment, the NPV is $16,867,403/1.1 - 10,000,000 = \boxed{\$5,334,002}$.

2.3. Present value of investment and fixed expenses is

$$20 + a_{\overline{7}|} = 20 + \frac{1 - 1/1.12^7}{0.12} = 24.563757 \text{ million}$$

Present value of net profit from sale of 1 desk per year is

$$300 \left(\frac{1 - 1/1.12^7}{0.12} \right) = 1369.127$$

So to break even, $24,563,757/1369.127 = \boxed{17,941}$ desks per year must be sold.

2.4. Let r be the cost of capital. At time 1, the present value of future free cash flows is $1/(r - 0.03)$ in millions. Thus at time 0 the present value of these cash flows is $1/((1+r)(r - 0.03))$. We want r such that

$$\begin{aligned} -8 - \frac{2}{1+r} + \frac{1}{(1+r)(r-0.03)} &= 0 \\ -8(1+r)(r-0.03) - 2(r-0.03) + 1 &= 0 \\ 8r^2 + 9.76r - 1.3 &= 0 \\ r &= \boxed{0.121163} \end{aligned}$$

2.5. The present value at annual effective rate r of cash flows for n years at the end of each year starting at 1 and growing at a rate of g is

$$\frac{1}{1+r} \sum_{k=0}^{n-1} \left(\frac{1+g}{1+r} \right)^k = \frac{1}{1+r} \frac{1 - \left(\frac{1+g}{1+r} \right)^n}{1 - (1+g)/(1+r)} = \frac{1 - \left(\frac{1+g}{1+r} \right)^n}{r-g}$$

In the following, all numbers are in millions. For the free cash flows in first year assumption, the NPVs of the worst and best cases are:

$$\begin{aligned} -8 + 1.1 \left(\frac{1 - (1.03/1.1)^{10}}{0.10 - 0.03} \right) &= -0.42788 \\ -8 + 1.3 \left(\frac{1 - (1.03/1.1)^{10}}{0.10 - 0.03} \right) &= 0.94887 \end{aligned}$$

with difference 1.37675.

For the rate of growth assumption, the NPVs of the worst and best cases are:

$$-8 + 1.2 \left(\frac{1 - (1/1.1)^{10}}{0.10} \right) = -0.62652$$

$$-8 + 1.2 \left(\frac{1 - (1.05/1.1)^{10}}{0.10 - 0.05} \right) = 0.92777$$

with difference 1.55429

For the number of years of free cash flows assumption, the NPVs of the worst and best cases are:

$$-8 + 1.2 \left(\frac{1 - (1.03/1.1)^7}{0.10 - 0.03} \right) = -1.67634$$

$$-8 + 1.2 \left(\frac{1 - (1.03/1.1)^{13}}{0.10 - 0.03} \right) = 1.85060$$

with difference 3.52694.

The most sensitive assumption is **number of years**.

2.6. We will ignore the investment cost, which is the same in all scenarios.

For annual units sold, the NPVs of the worst and best cases are:

$$\frac{1,000,000(1.50)(0.8)}{0.15} = 8,000,000$$

$$\frac{1,500,000(1.50)(0.8)}{0.15} = 12,000,000$$

with difference 4,000,000.

For price per unit, the NPVs of the worst and best cases are:

$$\frac{1,200,000(1.25)(0.8)}{0.15} = 8,000,000$$

$$\frac{1,200,000(1.60)(0.8)}{0.15} = 10,240,000$$

with difference 2,240,000.

For expenses, the NPVs of the worst and best cases are:

$$\frac{1,200,000(1.50)(0.77)}{0.15} = 9,240,000$$

$$\frac{1,200,000(1.50)(0.85)}{0.15} = 10,200,000$$

with difference 960,000.

Annual units sold has the highest sensitivity.

2.7.

$$\bar{x} = \frac{1 + 3 + 7 + 15 + 25 + 39}{6} = 15$$

$$\sigma_{sv}^2 = \frac{(1 - 15)^2 + (3 - 15)^2 + (7 - 15)^2}{6} = \boxed{67\frac{1}{3}}$$

2.8. A normal distribution is symmetric. So the downside semi-variance and the upside semi-variance are equal, and the downside semi-variance is therefore half the total variance, or 50. The downside standard deviation is $\sqrt{50} = \boxed{7.0711}$.

2.9. This is a beta distribution. If you recognize it and are familiar with beta, you know that the mean is $2/3$. Otherwise it is not hard to calculate:

$$E[X] = \int_0^1 2x^2 dx = \frac{2}{3}$$

The downside semi-variance is

$$\begin{aligned} \sigma_{sv}^2 &= \int_0^{2/3} \left(x - \frac{2}{3}\right)^2 2x dx \\ &= \int_0^{2/3} 2x^3 dx - \int_0^{2/3} \frac{8}{3}x^2 dx + \int_0^{2/3} \frac{8}{9}x dx \\ &= \frac{2}{4}\left(\frac{2}{3}\right)^4 - \frac{8/3}{3}\left(\frac{2}{3}\right)^3 + \frac{8/9}{2}\left(\frac{2}{3}\right)^2 = \boxed{0.032922} \end{aligned}$$

2.10. We need the first percentile of profits. Let it be x . Then

$$\begin{aligned} e^{-1000/x} &= 0.01 \\ \frac{1000}{x} &= -\ln 0.01 \\ x &= -\frac{1000}{\ln 0.01} = \boxed{217.15} \end{aligned}$$

2.11. Let x be the VaR. Then

$$\begin{aligned} \left(\frac{1000}{x}\right)^2 &= 0.995 \\ \frac{1000}{x} &= 0.997497 \\ x &= \frac{1000}{0.997497} = \boxed{1002.51} \end{aligned}$$

2.12. The 95th percentile of losses is the point with a 5% probability of losses above that point. Since the top interval has probability 3%, we need a subset of the (5000, 10000] interval with probability 2%. That interval has probability 5%, so we need the top 2/5 of the interval, making 8000 the 95th percentile. The expected value of losses given that they're above 8000 can be calculated using the double expectation formula:

$$\begin{aligned} \text{TVaR}(X) &= E[X | X > 8000] \\ &= \Pr(X \leq 10000 | X > 8000) E[X | 8000 < X \leq 10000] + \Pr(X > 10000) E[X | X > 10000] \end{aligned}$$

By uniformity, $E[X \leq 10000 | X > 8000] = 9000$ and $E[X | X > 10000] = 15000$. So

$$\text{TVaR}(X) = 0.4(9000) + 0.6(15000) = \boxed{12,600}$$

2.13. The 5th percentile of X is

$$\begin{aligned} e^{-x/1000} &= 0.95 \\ x &= -1000 \ln 0.95 = 51.2933 \end{aligned}$$

The straightforward way to calculate the conditional expectation is to integrate x over the density function and then divide by 0.05, the probability of $X < 51.2933$. The density function is $0.001e^{-x/1000}$.

$$\int_0^{51.2933} 0.001x e^{-x/1000} dx = -xe^{-x/1000} \Big|_0^{51.2933} + \int_0^{51.2933} e^{-x/1000} dx$$

$$= -51.2933e^{-0.0512933} - 1000e^{-0.0512933} + 1000 = 1.27137$$

$$\text{TVaR}_{0.05}(X) = \frac{1.27137}{0.05} = \boxed{25.4274}$$

2.14. Average the top 5 numbers.

$$\frac{976 + 989 + 1005 + 1032 + 1050}{5} = \boxed{1010.4}$$

2.15. $g(X)$ does not satisfy translation invariance since $\mathbf{E}[(X + c)^2] \neq \mathbf{E}[X]^2 + c$. It does not satisfy positive homogeneity since $\mathbf{E}[(cX)^2] \neq c \mathbf{E}[X^2]$. Also, $\mathbf{E}[(X + Y)^2] = \mathbf{E}[X^2] + 2 \mathbf{E}[XY] + \mathbf{E}[Y^2]$. Since $\mathbf{E}[XY]$ may be greater than 0, it does not satisfy subadditivity. However, it does satisfy monotonicity, since if $X \leq Y$, and both X and Y are nonnegative, then $X^2 - Y^2 \leq 0$ so $\mathbf{E}[X^2] - \mathbf{E}[Y^2] \leq 0$.

2.16. $g(X)$ does not satisfy translation invariance since $\mathbf{E}[\sqrt{X + c}] \neq \mathbf{E}[\sqrt{X}] + c$. It does not satisfy positive homogeneity since $\mathbf{E}[\sqrt{cX}] \neq c \mathbf{E}[\sqrt{X}]$. For subadditivity, we need

$$\mathbf{E}[\sqrt{X + Y}] \leq \mathbf{E}[\sqrt{X}] + \mathbf{E}[\sqrt{Y}] = \mathbf{E}[\sqrt{X} + \sqrt{Y}]$$

This will be true if $\sqrt{x + y} \leq \sqrt{x} + \sqrt{y}$ for all $x, y \geq 0$. Square both sides of the inequality, and this is equivalent to $\sqrt{xy} \geq 0$, which is true. So this risk measure is subadditive. It is also monotonic, since if $X \leq Y$, then $\sqrt{X} - \sqrt{Y} \leq 0$ and therefore the expected value of $\sqrt{X} - \sqrt{Y}$ is less than 0.

Quiz Solutions

2-1. The present value of the free cash flows, in millions, is $1/(0.09 - 0.03) = 16.666667$. The NPV is $16,666,667 - 10,000,000 = \boxed{6,666,667}$.

2-2. Let n be the number of years the product sells. The NPV in millions is $-9 + a_{\overline{n}|}$.

$$-9 + \frac{1 - 1/1.1^n}{0.1} = 0$$

$$1 - \frac{1}{1.1^n} = 0.9$$

$$1.1^n = \frac{1}{0.1} = 10$$

$$n \ln 1.1 = \ln 10$$

$$n = 24.1589$$

Since we have no provision for fractional years, the answer is $\boxed{25}$, although this leads to a slightly positive NPV.

2-3. The mean is 15. The sample semi-variance is

$$\frac{(5 - 15)^2 + (10 - 15)^2}{5} = \boxed{25}$$

Practice Exam 1

1. Options on XYZ stock trade on the Newark Exchange. Each option is for 100 shares. You are given that on March 21:

- (i) 3000 options traded.
- (ii) The price of a share of stock was \$40.
- (iii) The price of each option was \$90.

Determine the total notional value of all of the options traded.

- (A) 3,000 (B) 9,000 (C) 120,000 (D) 270,000 (E) 12,000,000

2. For American put options on a stock with identical expiry dates, you are given the following prices:

Strike price	Put premium
30	2.40
35	6.40

For an American put option on the same stock with the same expiry date and strike price 38, which of the following statements is correct?

- (A) The lowest possible price for the option is 8.80.
- (B) The highest possible price for the option is 8.80.
- (C) The lowest possible price for the option is 9.20.
- (D) The highest possible price for the option is 9.20.
- (E) The lowest possible price for the option is 9.40.

3. A company has 100 shares of ABC stock. The current price of ABC stock is 30. ABC stock pays no dividends. The company would like to guarantee its ability to sell the stock at the end of six months for at least 28. European call options on the same stock expiring in 6 months with exercise price 28 are available for 4.10. The continuously compounded risk-free interest rate is 5%.

Determine the cost of the hedge.

- (A) 73 (B) 85 (C) 99 (D) 126 (E) 141

4. You are given the following prices for a stock:

Time	Price
Initial	39
After 1 month	39
After 2 months	37
After 3 months	43

A portfolio of 3-month Asian options, each based on monthly averages of the stock price, consists of the following:

- (i) 100 arithmetic average price call options, strike 36.
- (ii) 200 geometric average strike call options.
- (iii) 300 arithmetic average price put options, strike 41.

Determine the net payoff of the portfolio after 3 months.

- (A) 1433 (B) 1449 (C) 1464 (D) 1500 (E) 1512

5. The price of a 6-month futures contract on widgets is 260.

A 6-month European call option on the futures contract with strike price 256 is priced using Black's formula.

You are given:

- (i) The continuously compounded risk-free rate is 0.04.
- (ii) The volatility of the futures contract is 0.25.

Determine the price of the option.

- (A) 19.84 (B) 20.16 (C) 20.35 (D) 20.57 (E) 20.74

6. The beta of a stock is 0.8. The volatility of the stock is 0.3.

The volatility of the market portfolio is 0.2.

Calculate the non-diversifiable risk of the stock, as measured by volatility.

- (A) 0.16 (B) 0.20 (C) 0.25 (D) 0.40 (E) 0.60

7. Investor A bought a 40-strike European call option expiring in 1 year on a stock for 5.50. Investor A earned a profit of 6.44 at the end of the year.

Investor B bought a 45-strike European call option expiring in 1 year on the same stock at the same time, and earned a profit of 3.22 at the end of the year.

The continuously compounded risk-free interest rate is 2%.

Determine the price of the 45-strike European call option.

- (A) 3.67 (B) 3.71 (C) 3.75 (D) 3.78 (E) 3.82

8. Which of the following are inconsistent with the semi-strong form of the efficient market hypothesis but not with the weak form?

- I. Changes in a stock's price in a week are positively correlated with changes in that stock's price in the previous week.
- II. One can beat the market by using publicly available information.
- III. One can beat the market by using hard-to-get information.

- (A) None (B) I only (C) II only (D) III only
 (E) The correct answer is not given by (A), (B), (C), or (D).

9. You own 100 shares of a stock whose current price is 42. You would like to hedge your downside exposure by buying 100 6-month European put options with a strike price of 40. You are given:

- (i) The Black-Scholes framework is assumed.
- (ii) The continuously compounded risk-free interest rate is 5%.
- (iii) The stock pays no dividends.
- (iv) The stock's volatility is 22%.

Determine the cost of the put options.

- (A) 121 (B) 123 (C) 125 (D) 127 (E) 129

10. You are given the following information for a European call option expiring at the end of three years:

- (i) The current price of the stock is 66.
- (ii) The strike price of the option is 70.
- (iii) The continuously compounded risk-free interest rate is 0.05.
- (iv) The continuously compounded dividend rate of the stock is 0.02.

The option is priced using a 1-period binomial tree with $u = 1.3$, $d = 0.7$.

A replicating portfolio consists of shares of the underlying stock and a loan.

Determine the amount borrowed in the replicating portfolio.

- (A) 14.94 (B) 15.87 (C) 17.36 (D) 17.53 (E) 18.43

11. A company has a 25% probability of having 50 million in assets and a 75% probability of having 150 million in assets at the end of one year. It has debt of 80 million due in one year. Bankruptcy costs are 20 million.

The cost of debt capital is 6% and the cost of equity capital is 18%.

The corporate tax rate is 20%.

Calculate the value of the company.

- (A) 101.1 million (B) 108.1 million (C) 108.9 million (D) 112.8 million (E) 113.7 million

12. For European options on a stock having the same expiry and strike price, you are given:

- (i) The stock price is 85.
- (ii) The strike price is 90.
- (iii) The continuously compounded risk free rate is 0.04.
- (iv) The continuously compounded dividend rate on the stock is 0.02.
- (v) A call option has premium 9.91.
- (vi) A put option has premium 12.63.

Determine the time to expiry for the options.

- (A) 3 months (B) 6 months (C) 9 months (D) 12 months (E) 15 months

13. A portfolio of European options on a stock consists of a bull spread of calls with strike prices 48 and 60 and a bear spread of puts with strike prices 48 and 60.

You are given:

- (i) The options all expire in 1 year.
- (ii) The current price of the stock is 50.
- (iii) The stock pays dividends at a continuously compounded rate of 0.01.
- (iv) The continuously compounded risk-free interest rate is 0.05.

Calculate the price of the portfolio.

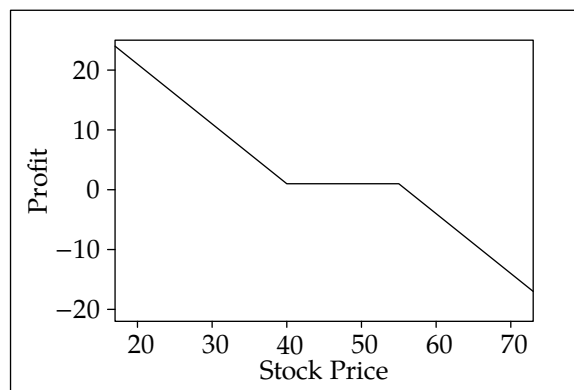
- (A) 9.51 (B) 9.61 (C) 9.90 (D) 11.41 (E) 11.53

14. Stock ABC's expected annual rate of return is 0.10 with volatility 0.25. Stock DEF's expected annual rate of return is 0.08 with volatility 0.30. An equally weighted portfolio of the two stocks has a volatility of 0.22.

Calculate the correlation between the two stock returns.

- (A) 0.021 (B) 0.079 (C) 0.137 (D) 0.274 (E) 0.548

15. You are given the following graph of the profit on a position with derivatives:



Determine which of the following positions has this profit graph.

- (A) Long forward
- (B) Short forward
- (C) Long collar
- (D) Long collared stock
- (E) Short collar

16. Which of the following behaviors may make the market portfolio inefficient?

- I. Investors invest in stocks they are most familiar with.
- II. Investors seek sensation.
- III. Investors hang on to losers and sell winners.

- (A) I and II only (B) I and III only (C) II and III only (D) I, II, and III
 (E) The correct answer is not given by (A), (B), (C), or (D).

17. For a put option on a stock:

- (i) The premium is 2.56.
- (ii) Delta is -0.62 .
- (iii) Gamma is 0.09.
- (iv) Theta is -0.02 per day.

Calculate the delta-gamma-theta approximation for the put premium after 3 days if the stock price goes up by 2.

- (A) 1.20 (B) 1.32 (C) 1.44 (D) 1.56 (E) 1.62

18. Which of the following are differences between a venture capital firm and a private equity firm?

- I. Private equity firms deal with existing privately held firms while venture capital firms deal with start-up companies.
- II. Private equity deals are larger.
- III. General partners of venture capital firms receive carried interest, unlike general partners of private equity firms.

- (A) I and II (B) I and III (C) II and III (D) I, II, and III
 (E) The correct answer is not given by (A), (B), (C), or (D).

19. For an at-the-money European call option on a nondividend paying stock:

- (i) The price of the stock follows the Black-Scholes framework
- (ii) The option expires at time t .
- (iii) The option's delta is 0.5832.

Calculate delta for an at-the-money European call option on the stock expiring at time $2t$.

- (A) 0.62 (B) 0.66 (C) 0.70 (D) 0.74 (E) 0.82

20. You are given the following sample:

10 25 48 52 100 125

Calculate the sample downside standard deviation.

- (A) 25.4 (B) 25.6 (C) 27.0 (D) 27.4 (E) 27.8

21. Gap options on a stock have six months to expiry, strike price 50, and trigger 49. You are given:

- (i) The stock price is 45.
- (ii) The continuously compounded risk free rate is 0.08.
- (iii) The continuously compounded dividend rate of the stock is 0.02.

The premium for a gap call option is 1.68.

Determine the premium for a gap put option.

- (A) 4.20 (B) 5.17 (C) 6.02 (D) 6.96 (E) 7.95

22. Determine which of the following positions has the same cash flow as a short zero-coupon bond position.

- (A) Long stock and long forward
- (B) Long stock and short forward
- (C) Short stock and long forward
- (D) Short stock and short forward
- (E) Long forward and short forward

23. A 1-year American pound-denominated put option on euros allows the sale of €100 for £90. It is modeled with a 2-period binomial tree based on forward prices. You are given

- (i) The spot exchange rate is £0.8/€.
- (ii) The continuously compounded risk-free rate in pounds is 0.06.
- (iii) The continuously compounded risk-free rate in euros is 0.04.
- (iv) The volatility of the exchange rate of pounds to euros is 0.1.

Calculate the price of the put option.

- (A) 8.92 (B) 9.36 (C) 9.42 (D) 9.70 (E) 10.00

24. You are conducting a break-even analysis on a project. The project has the following parameters:

- (i) Initial investment: 16 million.
- (ii) Free cash flows in first year: 2 million.
- (iii) Rate of growth in cash flows: 3% per year.
- (iv) Cost of capital: 12% annual effective rate.
- (v) Project lifetime: infinite

Calculate the cost of capital to break even.

- (A) 0.115 (B) 0.125 (C) 0.135 (D) 0.145 (E) 0.155

25. The price of an asset, $X(t)$, follows the Black-Scholes framework. You are given that

- (i) The continuously compounded expected rate of appreciation is 0.1.
- (ii) The volatility is 0.2.

Determine $\Pr(X(2)^3 > X(0)^3)$.

- (A) 0.63 (B) 0.65 (C) 0.67 (D) 0.69 (E) 0.71

26. A market-maker writes a 1-year call option and delta-hedges it. You are given:

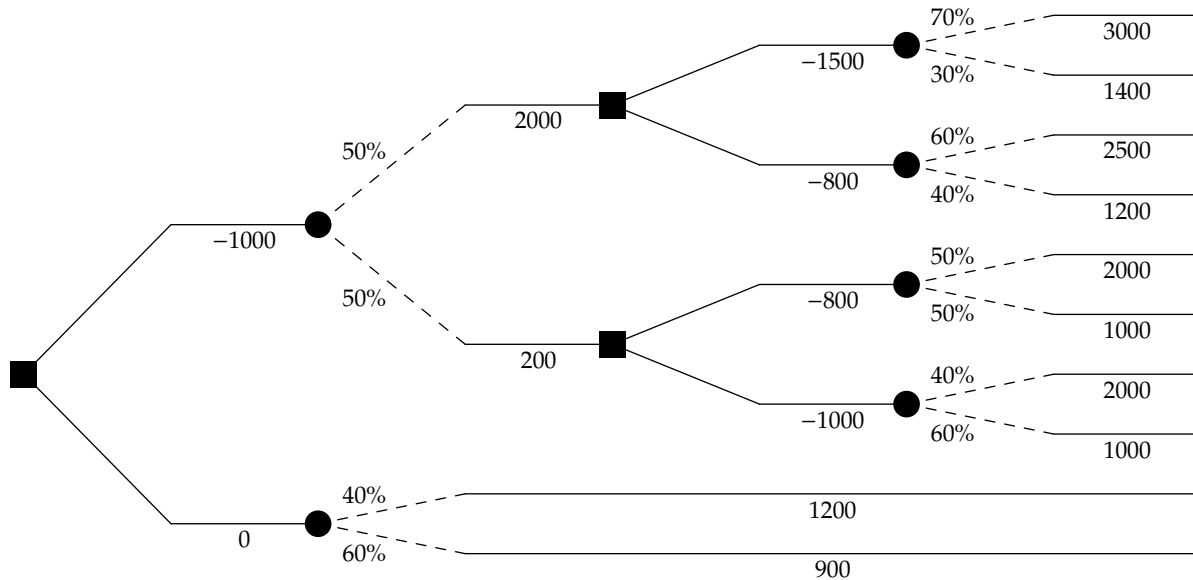
- (i) The stock's current price is 100.
- (ii) The stock pays no dividends.
- (iii) The call option's price is 4.00.
- (iv) The call delta is 0.76.
- (v) The call gamma is 0.08.
- (vi) The call theta is -0.02 per day.
- (vii) The continuously compounded risk-free interest rate is 0.05.

The stock's price rises to 101 after 1 day.

Estimate the market-maker's profit.

- (A) -0.04 (B) -0.03 (C) -0.02 (D) -0.01 (E) 0

27. You are given the following decision tree for a project:



The interest rate is 0.

Calculate the expected profit using the optimal strategy.

- (A) 1000 (B) 1020 (C) 1040 (D) 1060 (E) 1080

28. You are given:

- (i) The price of a stock is 40.
- (ii) The continuous dividend rate for the stock is 0.02.
- (iii) Stock volatility is 0.3.
- (iv) The continuously compounded risk-free interest rate is 0.06.

A 3-month at-the-money European call option on the stock is priced with a 1-period binomial tree. The tree is constructed so that the risk-neutral probability of an up move is 0.5 and the ratio between the prices on the higher and lower nodes is $e^{2\sigma\sqrt{h}}$, where h is the amount of time between nodes in the tree.

Determine the resulting price of the option.

- (A) 3.11 (B) 3.16 (C) 3.19 (D) 3.21 (E) 3.28

29. You are given the following information for two stocks:

	Expected return	Volatility
Stock A	0.2	0.3
Stock B	0.1	0.2

The correlation between the two stocks is -0.5 .

A portfolio consists of 16% Stock A and 84% Stock B.

There is a more efficient portfolio of the two stocks having the same volatility.

Determine the proportion of that portfolio invested in Stock A.

- (A) 0.44 (B) 0.52 (C) 0.58 (D) 0.62 (E) 0.68

30. For a portfolio of call options on a stock:

Number of shares of stock	Call premium per share	Delta
100	11.4719	0.6262
100	11.5016	0.6517
200	10.1147	0.9852

Calculate delta for the portfolio.

- (A) 0.745 (B) 0.812 (C) 0.934 (D) 297.9 (E) 324.8

Solutions to the above questions begin on page 593.

Appendix A. Solutions for the Practice Exams

Answer Key for Practice Exam 1

1	E	11	C	21	B
2	A	12	E	22	C
3	E	13	D	23	E
4	B	14	D	24	E
5	A	15	C	25	E
6	A	16	E	26	B
7	C	17	C	27	C
8	C	18	A	28	B
9	E	19	A	29	C
10	B	20	B	30	E

Practice Exam 1

1. [Lesson 1] Notional value is the value of the underlying asset. Here that is $100(40) = 4000$ for each option, or $4000(3000) = \boxed{12,000,000}$ for all options. (E)

2. [Section 19.4] Options are convex, meaning that as the strike price increases, the rate of increase in the put premium does not decrease. The rate of increase from 30 to 35 is $(6.40 - 2.40)/(35 - 30) = 0.80$, so the rate of increase from 35 to 38 must be at least $(38 - 35)(0.80) = 2.40$, making the price at least $6.40 + 2.40 = 8.80$. Thus (A) is correct.

3. [Subsection 18.1] By put-call parity,

$$\begin{aligned}P &= C + Ke^{-rt} - Se^{-\delta t} \\ &= 4.10 + 28e^{-0.025} - 30 = 1.4087\end{aligned}$$

For 100 shares, the cost is $100(1.4087) = \boxed{140.87}$. (E)

4. [Section 27.1] The monthly arithmetic average of the prices is

$$\frac{39 + 37 + 43}{3} = 39.6667$$

The monthly geometric average of the prices is

$$\sqrt[3]{(39)(37)(43)} = 39.5893$$

The payments on the options are:

- The arithmetic average price call options with strike 36 pay $39.6667 - 36 = 3.6667$.
- The geometric average strike call options pay $43 - 39.5893 = 3.4107$.
- The arithmetic average price put options with strike 41 pay $41 - 39.6667 = 1.3333$.

The total payment on the options is $100(3.6667) + 200(3.4107) + 300(1.3333) = \boxed{1448.8}$. (B)

5. [Section 24.3] By Black's formula,

$$d_1 = \frac{\ln(260/256) + 0.5(0.25^2)(0.5)}{0.25\sqrt{0.5}} = 0.17609$$

$$d_2 = 0.17609 - 0.25\sqrt{0.5} = -0.00068$$

$$N(d_1) = N(0.17609) = 0.56989$$

$$N(d_2) = N(-0.00068) = 0.49973$$

$$C = 260e^{-0.02}(0.56989) - 256e^{-0.02}(0.49973) = \boxed{19.84} \quad (\text{A})$$

6. [Lesson 6] By formula (6.2), setting the portfolio equal to the market, beta is the quotient of the market risk of a stock over market volatility. So market risk of our stock, which is non-diversifiable, is $0.8(0.2) = \boxed{0.16}$. (A)

7. [Section 16.1] Let S be the value of the stock at the end of one year. Profit for Investor A is $S - 40 - 5.5e^{0.02} = 6.44$. Therefore $S = 52.05$.

- Let C be the call price for Investor B. For Investor B, profit was $52.05 - 45 - Ce^{0.02} = 3.22$. Therefore, $C = \boxed{3.75}$. (C)

8. [Lesson 4] I is inconsistent even with the weak form. II is inconsistent with the semi-strong form but not with the weak form. III is consistent even with the semi-strong form. (C)

9. [Lesson 24] For one share, Black-Scholes formula gives:

$$d_1 = \frac{\ln(42/40) + (0.05 - 0 + 0.5(0.22^2))(0.5)}{0.22\sqrt{0.5}} = 0.55212$$

$$d_2 = 0.55212 - 0.22\sqrt{0.5} = 0.39656$$

$$N(-d_2) = N(-0.39656) = 0.34585$$

$$N(-d_1) = N(-0.55212) = 0.29043$$

$$P = 40e^{-0.05(0.5)}(0.34585) - 42(0.29043) = 1.2944$$

- The cost of 100 puts is $100(1.2944) = \boxed{129.44}$. (E)

Note that this question has nothing to do with delta hedging. The purchaser is merely interested in guaranteeing that he receives at least 40 for each share, and does not wish to give up upside potential. A delta hedger gives up upside potential in return for keeping loss close to zero.

10. [Lesson 20] $C_d = 0$ and $C_u = 1.3(66) - 70 = 15.8$. By equation (20.2),

$$B = e^{-rt} \left(\frac{uC_d - dC_u}{u - d} \right) = e^{-0.15} \left(\frac{-0.7(15.8)}{0.6} \right) = -15.87$$

- $\boxed{15.87}$ is borrowed. (B)

11. [Lesson 11] In millions, the value of debt capital is $0.25(50 - 20) + 0.75(80) = 67.5$ discounted at $0.06(1 - 0.2) = 0.048$. The value of equity capital is $0.25(0) + 0.75(70) = 52.5$ discounted at 0.18. The company's value is

$$\frac{67.5}{1.048} + \frac{52.5}{1.18} = \boxed{108.900} \quad (\text{C})$$

12. [Subsection 18.1] By put-call parity

$$\begin{aligned} 12.63 - 9.91 &= 90e^{-0.04t} - 85e^{-0.02t} \\ 90e^{-0.04t} - 85e^{-0.02t} - 2.72 &= 0 \end{aligned}$$

Let $x = e^{-0.02t}$ and solve the quadratic for x .

$$x = \frac{85 + \sqrt{85^2 + 4(90)(2.72)}}{2(90)} = \frac{175.577}{180} = 0.975428$$

The other solution to the quadratic leads to $x < 0$, which is impossible for $x = e^{-0.02t}$. Now we solve for t .

$$\begin{aligned} e^{-0.02t} &= 0.975428 \\ 0.02t &= -\ln 0.975428 = 0.024879 \\ t &= 50(0.024879) = \boxed{1.244} \quad (\text{E}) \end{aligned}$$

13. [Section 17.3] This is a box spread. At expiry, the 48-strike call and put will require payment of 48, and the 60-strike call and put will result in receiving 60, so the portfolio will pay $60 - 48 = 12$. The present value of 12 is $12e^{-0.05} = \boxed{11.41}$. (D)

14. [Lesson 5] We will use formula (5.3). The average variance of the stocks is

$$\frac{1}{2}(0.25^2 + 0.3^2) = 0.07625$$

By formula (5.3),

$$0.22^2 = \frac{1}{2}(0.1525) + \frac{1}{2}\text{Cov}(ABC, DEF)$$

Solving for the covariance

$$\text{Cov}(ABC, DEF) = 2 \left(0.0484 - \frac{1}{2}(0.07625) \right) = 0.02055$$

The correlation is $0.02055 / (0.25 \cdot 0.3) = \boxed{0.274}$. (D)

15. [Section 17.3] A **long collar** has this graph. (C) A short forward wouldn't have the flat section. Long forwards and short collars increase in value with increasing stock prices. A collared stock has flat lines on the left and right.

16. [Section 8.1] I and II are idiosyncratic, so they do not make the market portfolio inefficient. III is systematic, so it makes the market portfolio inefficient. (E)

17. [Section 26.2] Theta is expressed per day of decrease, so we just have to multiply it as given by 3. Thus the change in price is

$$\Delta\epsilon + 0.5\Gamma\epsilon^2 + \theta h = -0.62(2) + 0.5(0.09)(2^2) - 0.02(3) = -1.12$$

The new price is $2.56 - 1.12 = \boxed{1.44}$. (C)

18. [Section 12.1] I and II are true. Fees for private equity firms are similar to fees for venture capital firms. (A)

19. [Section 25.1] Delta is $e^{-\delta t}N(d_1)$, or $N(d_1)$ for a nondividend paying stock. Since the option is at-the-money,

$$d_1 = \frac{(r + 0.5\sigma^2)t}{\sigma\sqrt{t}} = \frac{r + 0.5\sigma^2}{\sigma}\sqrt{t}$$

So doubling time multiplies d_1 by $\sqrt{2}$.

$$\begin{aligned} N(d_1) &= 0.5832 \\ d_1 &= N^{-1}(0.5832) = 0.2101 \\ d_1\sqrt{2} &= (0.2101)(1.4142) = 0.2971 \\ N(0.2971) &= \boxed{0.6168} \quad (\text{A}) \end{aligned}$$

20. [Section 2.3]

$$\begin{aligned} \bar{x} &= 60 \\ \sqrt{\frac{(10-60)^2 + (25-60)^2 + (48-60)^2 + (52-60)^2}{6}} &= \boxed{25.6027} \quad (\text{B}) \end{aligned}$$

21. [Section 28.1] For gap options, put-call parity applies with the strike price. If you buy a call and sell a put, if $S_T > K_2$ (the trigger price) you collect S_T and pay K_1 , and if $S_T < K_2$ you pay K_1 and collect S_T which is the same as collecting S_T and paying K_1 , so

$$C - P = Se^{-\delta t} - K_1e^{-rt}$$

In this problem,

$$P = C + K_1e^{-rt} - Se^{-\delta t} = 1.68 + 50e^{-0.04} - 45e^{-0.01} = \boxed{5.167} \quad (\text{B})$$

22. [Section 14.4] A synthetic forward is a long stock plus a short bond. So a short bond is a long forward plus a short stock. (C)

23. [Section 21.3] The 6-month forward rate of euros in pounds is $e^{(0.06-0.04)(0.5)} = e^{0.01} = 1.01005$. Up and down movements, and the risk-neutral probability of an up movement, are

$$\begin{aligned} u &= e^{0.01+0.1\sqrt{0.5}} = 1.08406 \\ d &= e^{0.01-0.1\sqrt{0.5}} = 0.94110 \\ p^* &= \frac{1.01005 - 0.94110}{1.08406 - 0.94110} = 0.4823 \\ 1 - p^* &= 1 - 0.4823 = 0.5177 \end{aligned}$$

The binomial tree is shown in Figure A.1. At the upper node of the second column, the put value is calculated as

$$P_u = e^{-0.03}(0.5177)(0.08384) = 0.04212$$

At the lower node of the second column, the put value is calculated as

$$P_d^{\text{tentative}} = e^{-0.03}((0.4823)(0.08384) + (0.5177)(0.19147)) = 0.13543$$

but the exercise value $0.9 - 0.75288 = 0.14712$ is higher so it is optimal to exercise. At the initial node, the calculated value of the option is

$$P^{\text{tentative}} = e^{-0.03}((0.4823)(0.04212) + (0.5177)(0.14712)) = 0.09363$$

Since $0.9 - 0.8 = 0.1 > 0.09363$, it is optimal to exercise the option immediately, so its value is 0.10 (which means that such an option would never exist), and the price of an option for €100 is $100(0.10) = \boxed{10}$. (E)

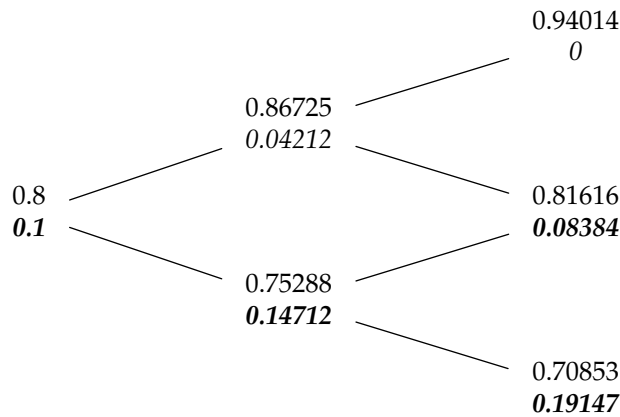


Figure A.1: Exchange rates and option values for put option of question 23

24. [Section 2.2] Let r be the cost of capital. The NPV in millions is

$$\begin{aligned} \text{NPV} &= -16 + \frac{2}{r - 0.03} = 0 \\ \frac{1}{r - 0.03} &= 8 \\ 8r - 0.24 &= 1 \\ r &= \frac{1.24}{8} = \boxed{0.155} \quad (\text{E}) \end{aligned}$$

25. [Section 23.2] The fraction $X(2)/X(0)$ follows a lognormal distribution with parameters $m = 2(0.1 - 0.5(0.2^2)) = 0.16$ and $v = 0.2\sqrt{2}$. Cubing does not affect inequalities, so the requested probability is the same as $\Pr(\ln X(2) - \ln X(0) > 0)$, which is

$$1 - N\left(\frac{-0.16}{0.2\sqrt{2}}\right) = N(0.56569) = \boxed{0.7142} \quad (\text{E})$$

26. [Section 26.2] By formula (26.3) with $\epsilon = 1$ and $h = 1/365$,

$$\begin{aligned} \text{Market-Maker Profit} &= -0.5\Gamma\epsilon^2 - \theta h - rh(S\Delta - C(S)) \\ &= -0.5(0.08)(1^2) + 0.02 - \frac{0.05}{365}[(100)(0.76) - 4] \\ &= -0.04 + 0.02 - 0.00986 = \boxed{-0.02986} \quad (\text{B}) \end{aligned}$$

27. [Lesson 30] For the bottom two nodes, expected profit is $0.4(1200) + 0.6(900) = 1020$. The expected profits at the four information nodes in the fourth column, one period before the end, are, in order from top to bottom:

$$\begin{aligned} 0.7(3000) + 0.3(1400) &= 2520 \\ 0.6(2500) + 0.4(1200) &= 1980 \\ 0.5(2000) + 0.5(1000) &= 1500 \\ 0.4(2000) + 0.6(1000) &= 1400 \end{aligned}$$

Pulling back to the third column, these become

$$2520 - 1500 = 1020$$

$$1980 - 800 = 1180$$

$$1500 - 800 = 700$$

$$1400 - 1000 = 400$$

At the upper decision node in the second column, 1180 is selected. At the lower decision node in the second column, 700 is selected. At the information node in the first column, expected profit is $0.5(1180 + 2000) + 0.5(700 + 200) = 2040$. After subtracting 1000, this yields **1040** at the initial decision node, which is greater than 1020, so it is the optimal profit. (C)

28. [Lesson 20] The risk-neutral probability is

$$0.5 = p^* = \frac{e^{(r-\delta)h} - d}{u - d} = \frac{e^{(0.06-0.02)(0.25)} - d}{u - d} = \frac{e^{0.01} - d}{u - d}$$

but $u = de^{2\sigma\sqrt{h}} = de^{2(0.3)(1/2)} = de^{0.3}$, so

$$e^{0.01} - d = 0.5(e^{0.3}d - d)$$

$$e^{0.01} = d(0.5(e^{0.3} - 1) + 1) = 1.17493d$$

$$d = \frac{e^{0.01}}{1.17493} = 0.85967$$

$$u = 0.85967e^{0.3} = 1.16043$$

The option only pays at the upper node. The price of the option is

$$C = e^{-rh}p^*(Su - K) = e^{-0.06(0.25)}(0.5)(40(1.16043) - 40) = \mathbf{3.1609} \quad (\text{B})$$

29. [Lesson 5] The variance of the portfolio is

$$0.16^2(0.3^2) + 0.84^2(0.2^2) + 2(-0.5)(0.16)(0.84)(0.2)(0.3) = 0.022464$$

Let p be the proportion invested in Stock A in the more efficient portfolio. Then

$$0.09p^2 + 0.04(1-p)^2 - 0.06p(1-p) = 0.022464$$

$$0.19p^2 - 0.14p + 0.017536 = 0$$

$$p = \frac{0.14 + \sqrt{0.006273}}{0.38} = \mathbf{0.5768} \quad (\text{C})$$

30. [Subsection 25.1.7] Delta for a portfolio of options on a single stock is the sum of the individual deltas of the options.

$$100(0.6262) + 100(0.6517) + 200(0.9852) = \mathbf{324.8} \quad (\text{E})$$

